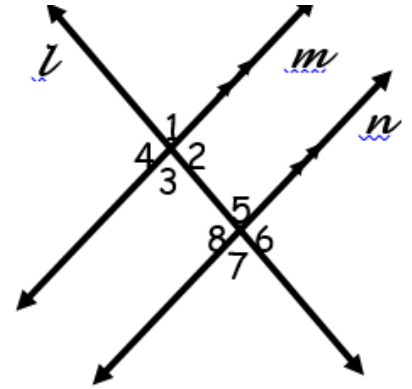
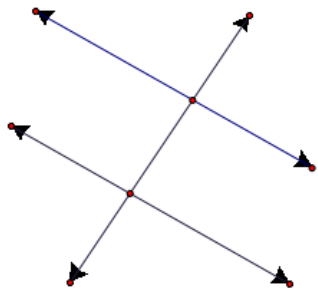


Name	Definition
Transversal	
Interior Angles	
Exterior Angles	
Adjacent Angles	



Parallel Lines cut by a transversal – Fill in each box with examples of each term!!

Alternate Interior

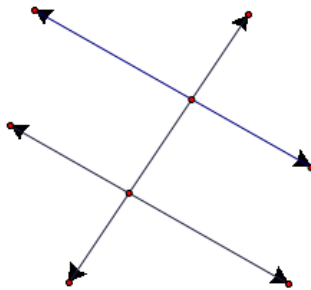


Alternate interior angles are

_____.

Examples:

Corresponding Angles

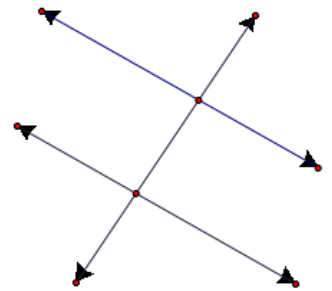


Corresponding angles are

_____.

Examples:

Alternate Exterior

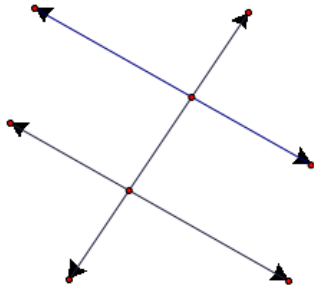


Alternate exterior angles are

_____.

Examples:

Same Side Interior or Consecutive Interior

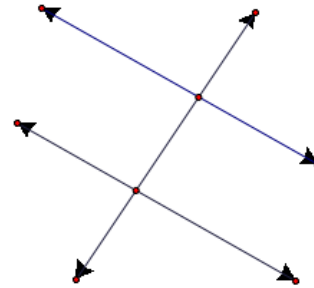


Same side interior or consecutive interior angles are

_____.

Examples:

Same Side Exterior or Consecutive Exterior

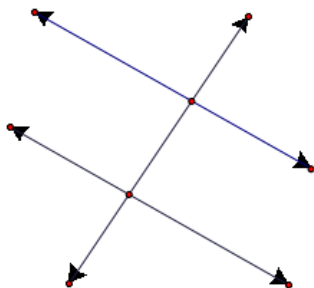


Same side exterior or consecutive exterior angles are

_____.

Examples:

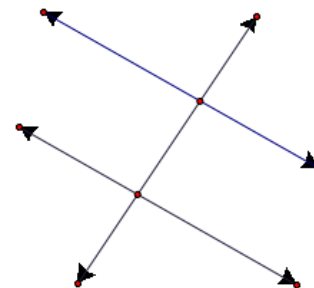
Vertical Pair



Vertical angles are _____.

Examples:

Linear Pair



Linear pair angles are _____.

Examples: